


Counting money - dimes & quarters

Grade 1 Counting Money Worksheet

Add the coins.

1)  = _____

2)  = _____

3)  = _____

4)  = _____


5)  = _____

6)  = _____


Counting money - dimes & quarters


Grade 1 Counting Money Worksheet

Add the coins.

1)  = 30¢ _____

2)  = 80¢ _____

3)  = 60¢ _____

4)  = 45¢ _____

5)  = 135¢ _____

6)  = 70¢ _____